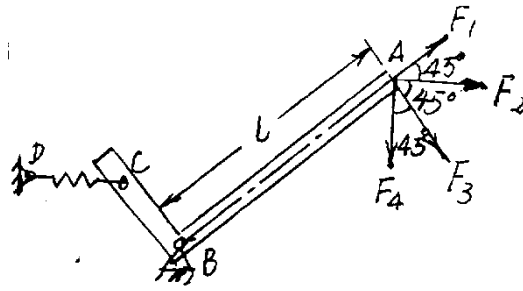

C. $m_B(F_3) = F_3 l \cos 45^\circ$

D. $m_B(F_4) = F_4 l$



2

12

24

1

2

(10)

?

?(11)

4

(10)

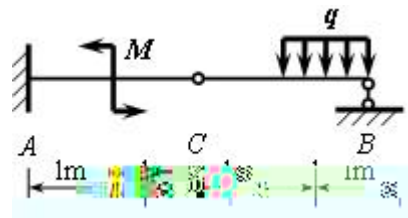
3

20

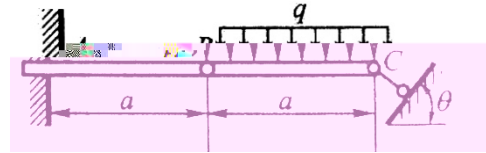
60

$q=10\text{kN/m}$ $M=10\text{kN}\cdot\text{m}$ A B

C



2



3

m

kN/m

kN

$kN.m$

